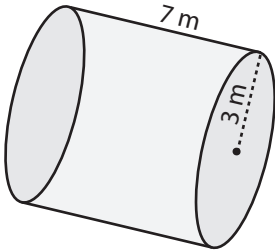


Volume - Mixed Shapes

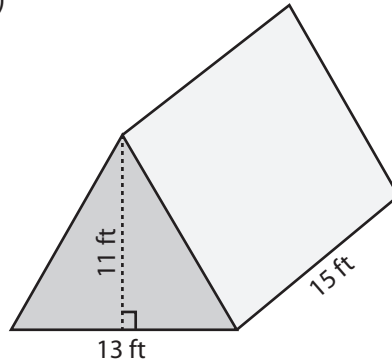
Find the exact volume of each shape.

1)



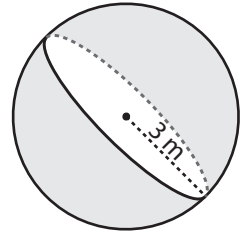
Volume = _____

2)



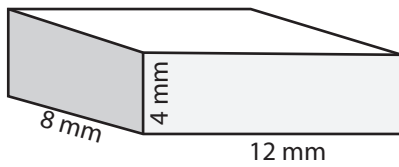
Volume = _____

3)



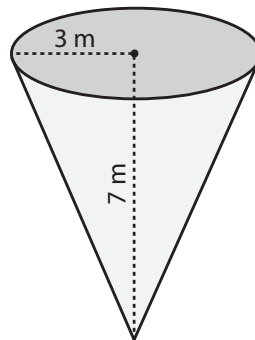
Volume = _____

4)



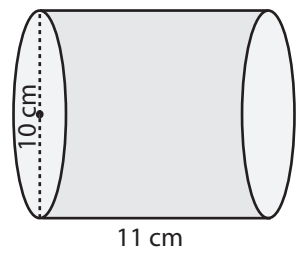
Volume = _____

5)



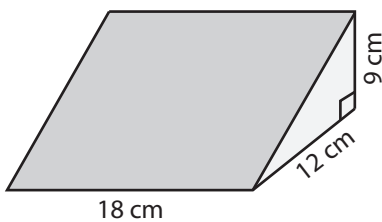
Volume = _____

6)



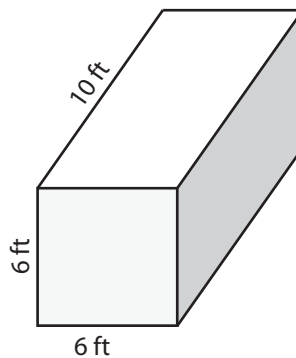
Volume = _____

7)



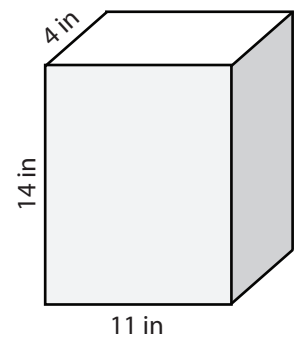
Volume = _____

8)



Volume = _____

9)

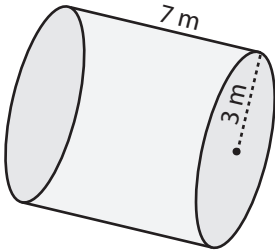


Volume = _____

Answer Key

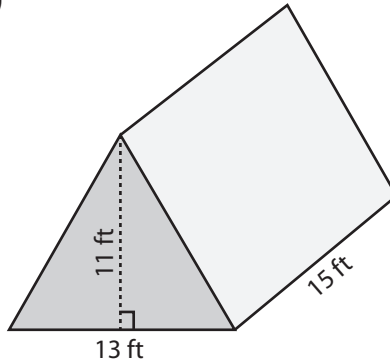
Find the exact volume of each shape.

1)



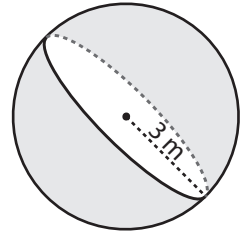
Volume = $63\pi \text{ m}^3$

2)



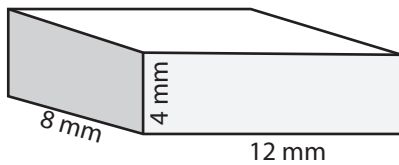
Volume = 1072.5 ft^3

3)



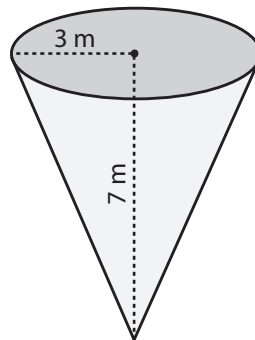
Volume = $36\pi \text{ m}^3$

4)



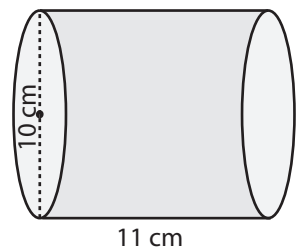
Volume = 384 mm^3

5)



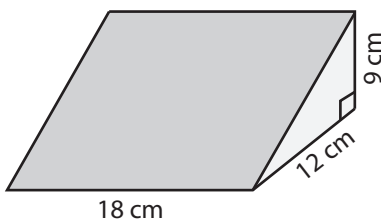
Volume = $21\pi \text{ m}^3$

6)



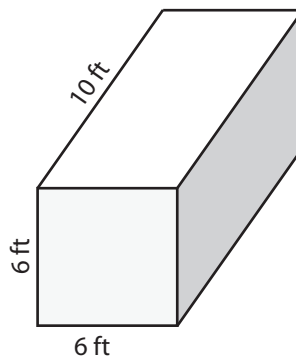
Volume = $275\pi \text{ cm}^3$

7)



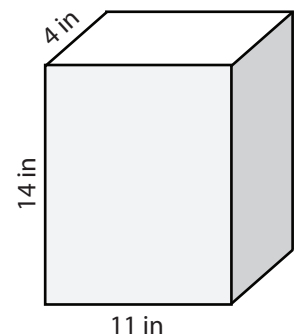
Volume = 972 cm^3

8)



Volume = 360 ft^3

9)



Volume = 616 in^3